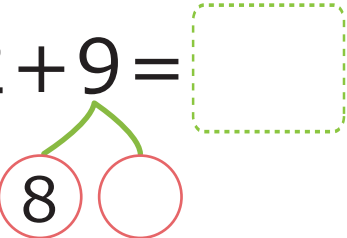
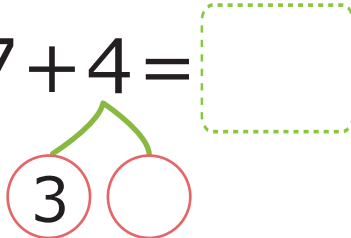
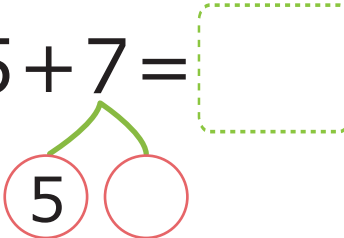
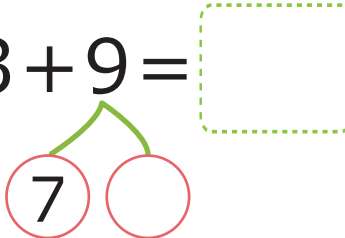
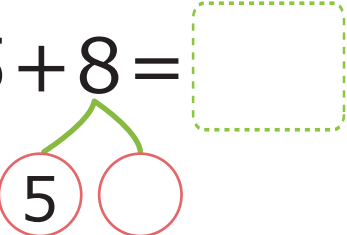


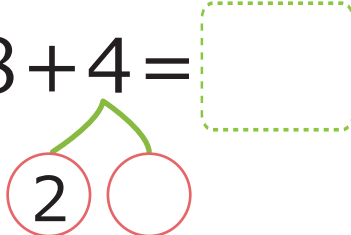
$$(1) 2 + 9 = \square$$


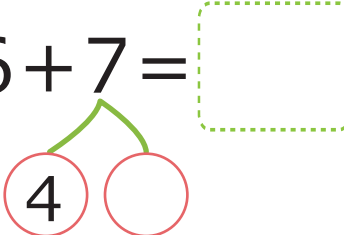
$$(5) 7 + 4 = \square$$


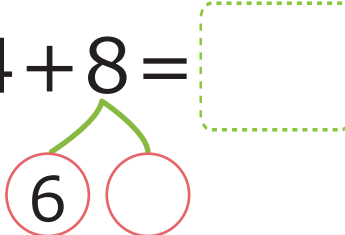
$$(9) 5 + 7 = \square$$


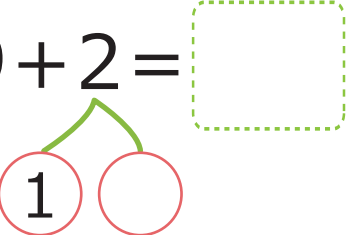
$$(13) 3 + 9 = \square$$


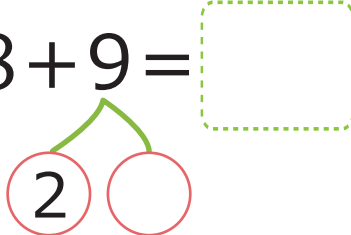
$$(2) 5 + 8 = \square$$


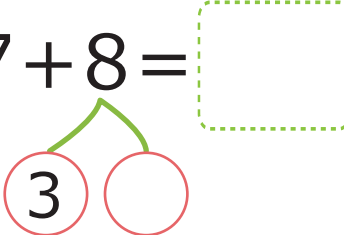
$$(6) 8 + 4 = \square$$


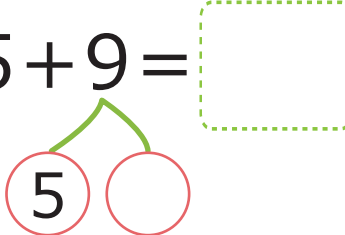
$$(10) 6 + 7 = \square$$


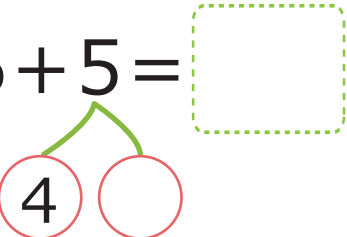
$$(14) 4 + 8 = \square$$



$$(3) 9 + 2 = \square$$


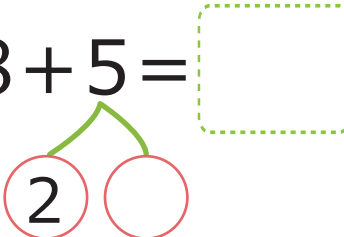
$$(7) 8 + 9 = \square$$


$$(11) 7 + 8 = \square$$


$$(15) 5 + 9 = \square$$


$$(4) 6 + 5 = \square$$


$$(8) 4 + 7 = \square$$


$$(12) 8 + 5 = \square$$


$$(16) 7 + 8 = \square$$
